

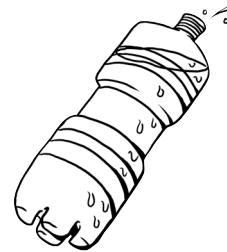





Find a Float

Name: _____

Look at each drawing and put a check mark next to it if you think it will float and an X if you think it will sink.



Write about why you think some objects float and some sink.
